

Name _____

Make Change

Find the amount of change.

1. Riley buys a notepad for \$1.59.
She pays with two \$1 bills.

\$0.41

2. Mario buys a bag of peanuts for \$3.45. He pays with a \$5 bill.

3. Zach buys a comic book for \$2.17.
He pays with three \$1 bills.


4. Liam buys a bottle of water for \$1.55. He pays with two \$1 bills.

5. Latrell buys an action figure for \$4.39. He pays with a \$5 bill.


6. Lu Chen buys a calendar for \$3.14. She pays with a \$5 bill.

Problem Solving REAL WORLD


Use the pictures for 7–8.



\$1.39



\$2.74



\$3.30

7. Sonya buys a bag of popcorn. She pays with three \$1 bills and 2 quarters. How much change should Sonya receive?

8. Keesha buys a sandwich. Her change is 1 quarter and 1 penny. How much money did Keesha give the cashier?

Lesson Check

- Alicia buys a baseball for \$4.27. She pays with a \$5 bill. How much change should Alicia receive?
 - (A) \$1.83
 - (B) \$1.73
 - (C) \$0.83
 - (D) \$0.73
- Harry buys yogurt for \$1.64. He pays with two \$1 bills. How much change should Harry receive?
 - (A) \$0.26
 - (B) \$0.36
 - (C) \$0.46
 - (D) \$1.36

Spiral Review

- What time is 3 hours 25 minutes after 4:30 P.M.? (Lesson 3.4)
- Which number is greater than 789 but less than 815? (Lesson 1.6)



- (A) 1:05 P.M.
 - (B) 4:55 P.M.
 - (C) 7:55 P.M.
 - (D) 8:05 P.M.
- Moira has 247 pennies in a jar. Latifa has 168 pennies. How many pennies do the two girls have in all? (Lesson 2.2)
 - (A) 415
 - (B) 405
 - (C) 315
 - (D) 305
 - Ricardo has 2 quarters, 4 dimes, and 2 nickels. He buys a pen that costs 75¢ using the fewest coins possible. How many coins does Ricardo use to pay for the pen? (Lesson 3.8)
 - (A) 3
 - (B) 4
 - (C) 5
 - (D) 6